

3. Numbers up to 99



Q1. Fill in the blanks with the correct number.

a. 

$$\boxed{10} + \boxed{10} + \boxed{4} = \boxed{}$$


b. 


$$\boxed{10} + \boxed{10} + \boxed{10} + \boxed{10} + \boxed{2} = \boxed{}$$


Q2. Match the expanded form with the correct numerals:

a. 2 tens + 5 ones	52
b. 7 tens + 6 ones	67
c. 6 tens + 7 ones	25
d. 5 tens + 2 ones	76

Q3. Fill in the missing numbers:

a. 




b. 




c. 

Q4. Write the correct number name for each number:




Number	Number Name
a. 82	
b. 78	
c. 31	
d. 95	




Q5. Fill in the correct symbol $<$, $>$ or $=$:











 $10 + 10 + 3$ $10 + 10 + 6$

 $10 + 10 + 10$ $10 + 10 + 2$

 $10 + 10 + 4$ $10 + 10 + 4$

Q6. Tick the largest number from the given set of numbers:

a. 66 82 77

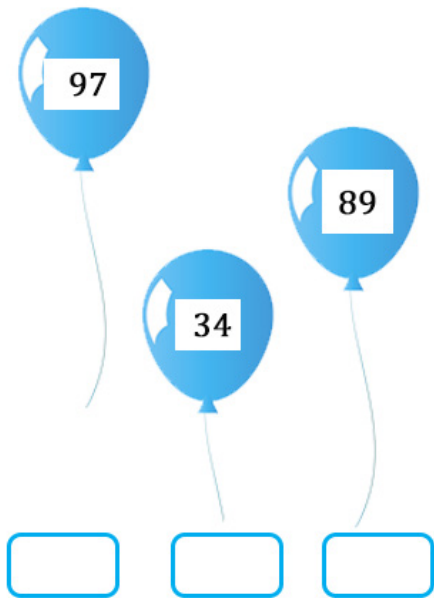
b. 95 98 93

Q7. Tick the smallest number from the given set of numbers:

a. 54 33 28

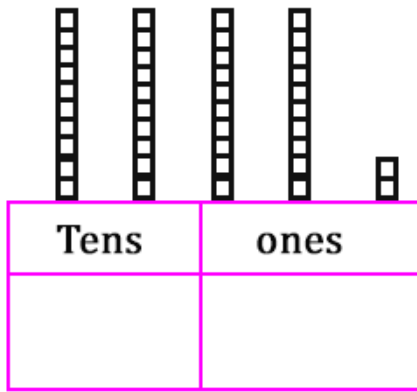
b. 81 18 91

Q8. Arrange the numbers in the balloons in ascending order:

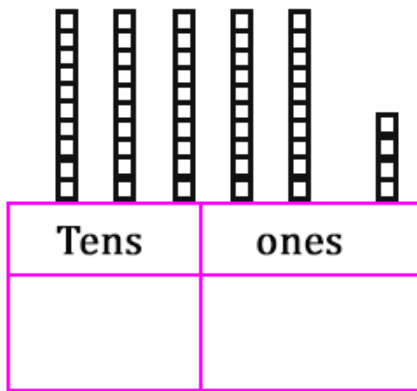


Q9. Fill in the boxes with the correct numerals:

a.



b.



Q10. Fill in the blanks with the number that comes just before the given numbers:

a. — 23

b. — 98

c. — 70

Q11. Fill in the blanks with the number that comes just after the given numbers:

a. 49 —

b. 80 —

c. 75 —

Q12. Fill in the blanks with the number that comes between the given numbers:

a. 35 _ 37

b. 89 _ 91

c. 68 _ 70

Q13. Fill in the blanks with correct numbers:

a. $37 = _ \text{ Tens} + _ \text{ Ones}$

b. $84 = _ \text{ Tens} + _ \text{ Ones}$

Q14. Complete the pattern:

10, 20, _ , _ , _ , 70, _ , _ , _

Q15. Fill in the boxes with the correct number and put the correct symbol $<$, $>$ or $=$.

2 Tens + 3 Ones

Tens	ones

2 Tens + 3 Ones

Tens	ones

Answers

1. a. 24
b. 42

2.

a. 2 tens + 5 ones	25
b. 7 tens + 6 ones	76
c. 6 tens + 7 ones	67
d. 5 tens + 2 ones	52

3. a. 42, 44
b. 69, 70
c. 75, 76

4. a. Eighty-two
b. Seventy-eight
c. Thirty-one
d. Ninety-five

5. a. <
b. >
c. =

6. a. 82
b. 98

7. a. 28

b. 18

8. 34, 89, 97

9. a. 42

b. 54

10. a. 22

b. 97

c. 69

11. a. 50

b. 81

c. 76

12. a. 36

b. 90

c. 69

13. a. 3 Tens + 7 Ones

b. 8 Tens + 4 Ones

14. 10, 20, 30, 40, 50, 60, 70, 80, 90, 100

15.

Tens	ones
2	3

=

Tens	ones
2	3